










Chi ha nascosto i miei guanti ?
Aiuta il pupazzo di neve : trovali e incollali. Grazie







| | | |
|---|----------------------|---|
|  | <input type="text"/> |  |
|---|----------------------|---|



| | | |
|---|---|----------------------|
|  |  | <input type="text"/> |
|---|---|----------------------|



| | | |
|---|---|----------------------|
|  |  | <input type="text"/> |
|---|---|----------------------|

| | | |
|----------------------|---|---|
| <input type="text"/> |  |  |
|----------------------|---|---|









| | | |
|----------------------|---|---|
| <input type="text"/> |  |  |
|----------------------|---|---|

| | | |
|---|----------------------|---|
|  | <input type="text"/> |  |
|---|----------------------|---|

| | | |
|---|----------------------|---|
|  | <input type="text"/> |  |
|---|----------------------|---|

| | | |
|---|---|----------------------|
|  |  | <input type="text"/> |
|---|---|----------------------|



| | | | |
|---|---|---|---|
|  |  |  |  |
|  |  |  |  |

ADDIZIONI ENTRO LA SECONDA DECINA

0 1 2 3 4 5 6 7 8 9 10

11 12 13 14 15 16 17 18 19 20



$2+8=10$

$6+6=10$

$3+6=8$

$9+3=12$

$6+4=9$

$7+5=13$

$6+5=11$


$7+6=13$

$5+5=11$


$4+11=15$

FIOCCHETTO TI DICE : NUMERA INSIEME A ME !

**ORDINE
DECRESCENTE
Da 20 a 0**



9 **A**ddizioni "sorpresa"!
 Divertiti con le operazioni
 di pupazzo Fiocchetto!
 GIRA , SCOPRI IL NUMERO
 SCRIVILO nel quadrato
 CONTA sulla linea dei numeri



$$6 + \square = \underline{\quad}$$

$$10 + \square = \underline{\quad}$$

$$2 + \square = \underline{\quad}$$

$$9 + \square = \underline{\quad}$$

$$3 + \square = \underline{\quad}$$

$$11 + \square = \underline{\quad}$$



$$+ \square = \underline{\quad}$$

$$4 + \square = \underline{\quad}$$

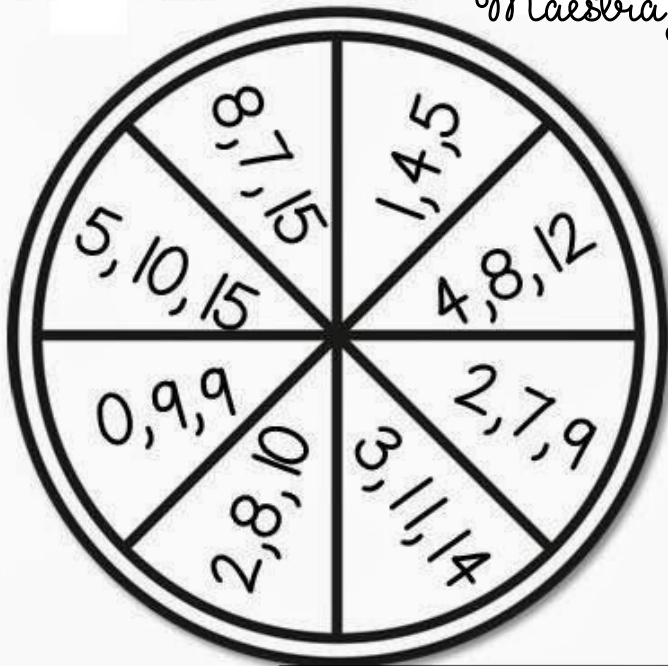
$$7 + \square = \underline{\quad}$$

$$5 + \square = \underline{\quad}$$

$$8 + \square = \underline{\quad}$$

Gira e divertiti a contare con la **MAGICA RUOTA** dei **NUMERI!** Addizioni e Sottrazioni da campioni !!

Maestra gabriella www.tateefate.com



| | | |
|---|---|--|
| | | |
| + | = | |
| + | = | |
| - | = | |
| - | = | |

| | | |
|---|---|--|
| | | |
| + | = | |
| + | = | |
| - | = | |
| - | = | |

| | | |
|---|---|--|
| | | |
| + | = | |
| + | = | |
| - | = | |
| - | = | |



| | | |
|---|---|--|
| | | |
| + | = | |
| + | = | |
| - | = | |
| - | = | |

| | | |
|---|---|--|
| | | |
| + | = | |
| + | = | |
| - | = | |
| - | = | |

VERO - FALSO



$15-11=3$

$9-5=4$

$12-5=8$

$16-4=11$

$13-6=7$

$10-6=5$

$15-5=10$

$11-3=8$

$13-6=8$

$7+9=16$



...evviva le OPERAZIONI INVERSE!



ADDIZIONI e SOTTRAZIONI "FREDDOLOSE"



| |
|-------------|
| $3 + 4 = 7$ |
| $4 + 3 = 7$ |
| $7 - 4 = 3$ |
| $7 - 3 = 4$ |

| | | | | |
|---|---|---|---|---|
| — | + | — | = | — |
| — | + | — | = | — |
| — | - | — | = | — |
| — | - | — | = | — |



| | | | | |
|---|---|---|---|---|
| — | + | — | = | — |
| — | + | — | = | — |
| — | - | — | = | — |
| — | - | — | = | — |

| | | | | |
|---|---|---|---|---|
| — | + | — | = | — |
| — | + | — | = | — |
| — | - | — | = | — |
| — | - | — | = | — |



| | | | | |
|---|---|---|---|---|
| — | + | — | = | — |
| — | + | — | = | — |
| — | - | — | = | — |
| — | - | — | = | — |

| | | | | |
|---|---|---|---|---|
| — | + | — | = | — |
| — | + | — | = | — |
| — | - | — | = | — |
| — | - | — | = | — |



A chi manca la cioccolata
con biscottini e panna?
Aiutami a trovare i numeri mancanti !
Grazie dal tuo amico FIOCCHETTO!



BRRRR...CHE FREDDO !!!

RISCALDIAMOCI CONTANDO FINO A...

10

$$5 + \text{mitten} = 8$$

$$7 + \text{mitten} = 9$$

$$6 + \text{mitten} = 10$$

$$9 + \text{mitten} = 10$$

$$2 + \text{mitten} = 7$$

$$1 + \text{mitten} = 6$$

$$7 + \text{mitten} = 8$$

$$2 + \text{mitten} = 4$$

$$\text{mitten} + 4 = 10$$

$$\text{mitten} + 6 = 9$$

$$\text{mitten} + 9 = 9$$







$$\text{mitten} + 8 = 10$$

$$\text{mitten} + 8 = 8$$



Si Lancia il dado turno per scoprire quale è la colonna
in cui risolvere L' OPERAZIONE.

Osserva la LINEA DEI NUMERI e CONTA
SCRIVI IL RISULTATO IN COLORE **ROSSO**


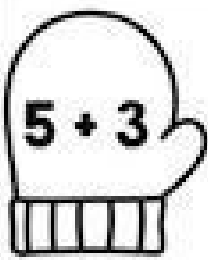















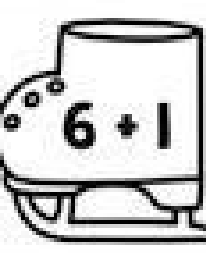







| ← 0 1 2 3 4 5 6 7 8 9 10 11 12 13 14 15 16 17 18 19 20 → | | | | | |
|---|---|---|---|---|---|
| $17+3=$ | $11-7=$ | $10+4=$ | $18-9=$ | $5+8=$ | $10-2=$ |
| $16+2=$ | $10-6=$ | $8+3=$ | $11-9=$ | $4+7=$ | $9-3=$ |
| $18+1=$ | $9-4=$ | $16+4=$ | $13-10=$ | $9+6=$ | $8-0=$ |
| $14+5=$ | $14-9=$ | $6+9=$ | $20-6=$ | $8+8=$ | $9-6=$ |
| $15+3=$ | $13-8=$ | $6+7=$ | $12-4=$ | $10+10=$ | $18-5=$ |
| $15+2=$ | $10-6=$ | $5+9=$ | $14-7=$ | $7+9=$ | $11-2=$ |
| $20+0=$ | $12-5=$ | $7+7=$ | $18-10=$ | $5+10=$ | $12-4=$ |
|  |  |  |  |  |  |



m/a gabriella www.tateefate.com



Trova i pattini e guanti di tutti gli amici

| | | | | |
|--|--|--|---|--|
|  8 |  $5 + 3$ |  $6 + 1$ |  $4 + 4$ |  $6 + 2$ |
|  6 |  $2 + 3$ |  $4 + 2$ |  $3 + 3$ |  $5 + 1$ |
|  9 |  $5 + 4$ |  $6 + 3$ |  $4 + 3$ |  $8 + 1$ |
|  7 |  $3 + 4$ |  $6 + 1$ |  $5 + 2$ |  $3 + 3$ |
|  5 |  $3 + 2$ |  $5 + 0$ |  $4 + 2$ |  $1 + 4$ |

Wow!

Cioccolata, biscotti e panna!
Chi vincerà la merenda di Susanna?



VERO = TAZZA ROSA












FALSO = TAZZA GIALLA

CONTA e SCRIVI:



FALSO=.....

VERO =

maestra gabriella www.tateefate.com



0 1 2 3 4 5 6 7 8 9 10 11 12 13 14 15 16 17 18 19 20




LA MAESTRA DETTA I COLORI DEI PASTELLI.

TU ESEGUI LE OPERAZIONI E USI I CORRISPONDENTI COLORI



3



6



9



11



4, 8




5, 10



2, 13



0, 1












7, 12

ORDINE DECRESCENTE

ORDINE CRESCENTE

ORDINE DECRESCENTE

| | | |
|--|---|--|
| <p>9 13 11</p>  | <p>16 8 12</p>  | <p>11 18 7</p>  |
| <p>19 20 9</p>  | <p>5 1 17</p>  | <p>4 16 10</p>  |
| <p>8 19 12</p>  | <p>20 14 5</p>  | <p>14 18 7</p>  |

I FIOCCHI DI NEVE HANNO NASCOSTO I NUMERI!
 TROVALI TU E CREA UGUAGLIANZE.
 QUESTE SONO OPERAZIONI DA CAMPIONI !!!!



$4+3 = \square - 6$



$9-6 = 2+ \square$



$9- \square = 3+5$



$\square - 2 = 4+3$



$8+2 = 10- \square$



$6+3 = \square - 1$




$\square - 4 = 8-3$



$9+ \square = 3+6$



$3+3 = \square + 4$



$10-6 = 8- \square$



$4+ \square = 10-2$



$\square - 2 = 3+5$



$7-3 = 2+ \square$



$4+7 = \square + 6$



$\square + 6 = 5+8$



$2+ \square = 7+2$



$4-4 = \square - 2$



$9-5 = 1+ \square$



$5+ \square = 9-2$



$\square + 1 = 10-7$